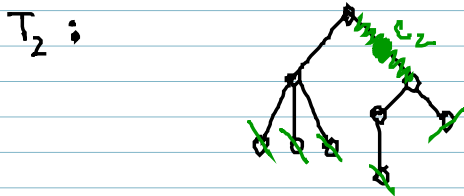
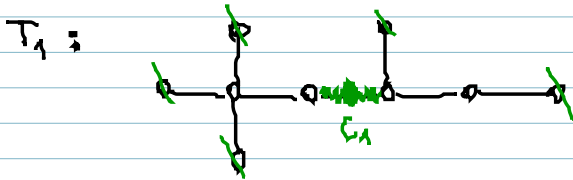
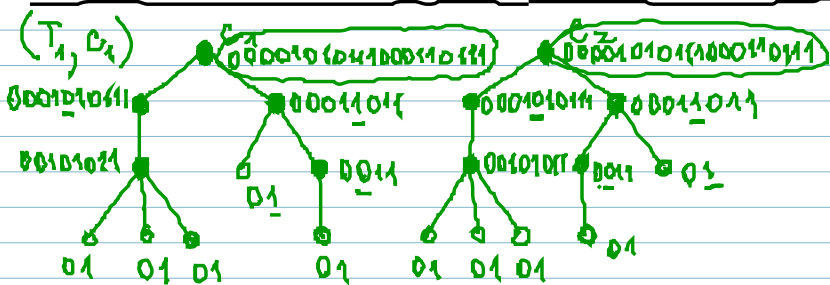


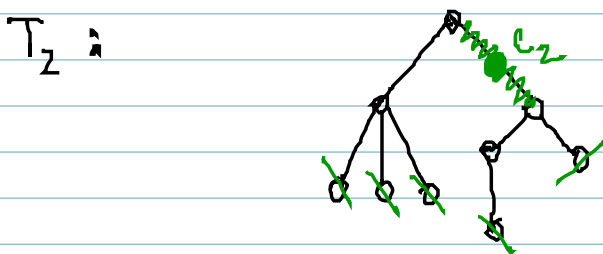
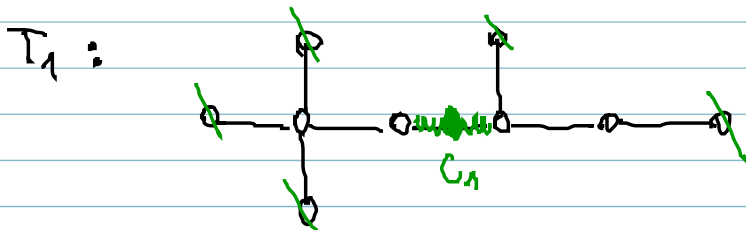
ROZHODNĚTE, ZDA JSOU STROMY T_1, T_2
IZOMORFNÍ.



(T_1, C_1) a (T_2, C_2) mají stejný min. kód
 $\Leftrightarrow T_1 \cong T_2$



ROZHODNĚTE, ZDA JSOU STROMY T_1, T_2 IZOMORFNÍ.



(T_1, C_1) a (T_2, C_2) mají stejný min. kód
 $\Leftrightarrow T_1 \cong T_2$

